

Name: _____

Class: _____

Add up to 10: flowers


Add flowers and fill in the blank boxes with answers.




3 yellow flowers + 3 yellow flowers =




4 red flowers + 4 red flowers =



5 pink flowers + 5 pink flowers =



6 orange flowers + 3 orange flowers =



6 pink flowers + 1 pink flower =