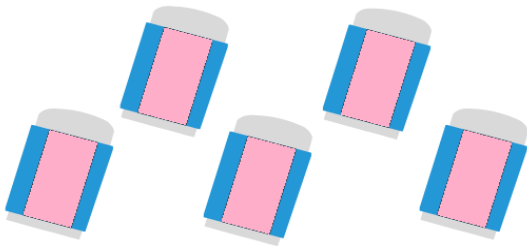


Name: \_\_\_\_\_


Class: \_\_\_\_\_

## Count and circle:


Count the stationery items and circle the correct number.



2 3 5



5 3 9



8 7 10



9 5 8