


Name: _____


Class: _____

Cross out and Subtract:

Cross out the numbers (animals) to be subtracted and solve the subtraction.



$$6 - 1 = \underline{\quad}$$




$$6 - 3 = \underline{\quad}$$




$$6 - 4 = \underline{\quad}$$



$$6 - 2 = \underline{\quad}$$



$$6 - 5 = \underline{\quad}$$



$$6 - 6 = \underline{\quad}$$