


Name: \_\_\_\_\_

Class: \_\_\_\_\_

## Cross out and Subtract:

Cross out the numbers (fruits) to be subtracted and solve the subtraction.




$7 - 2 = \underline{\quad}$




$7 - 1 = \underline{\quad}$



$7 - 3 = \underline{\quad}$



$7 - 5 = \underline{\quad}$



$7 - 4 = \underline{\quad}$



$7 - 7 = \underline{\quad}$