


Name: \_\_\_\_\_


Class: \_\_\_\_\_

## Number bonds:


Look at the pictures and complete the number bonds.



A rounded rectangular box containing three items. On the left is a pink, round, ribbed sweet on a white plate. In the middle is a stack of two pancakes with pink icing and a yellow square on top, on a white plate. On the right is a number bond diagram consisting of two empty circles at the top connected by lines to a single empty circle at the bottom.



A rounded rectangular box containing three items. On the left is a row of six burgers: three in the top row and three in the bottom row. In the middle is a stack of two cakes with yellow frosting and a red flag on top. On the right is a number bond diagram consisting of two empty circles at the top connected by lines to a single empty circle at the bottom.



A rounded rectangular box containing three items. On the left is a group of six lollipops with brown swirls and pink sticks. In the middle is a group of four donuts with pink frosting and yellow centers. On the right is a number bond diagram consisting of two empty circles at the top connected by lines to a single empty circle at the bottom.