


Name: _____

Class: _____

Identify planets:


Identify eight planets in the Solar System using hints.



The largest planet:



The home planet:



Has complex

and icy rings: _____




Smallest planet:




Spins in the opposite


direction: _____



The red planet:



The most distant planet:



Rotates on its

side: _____