

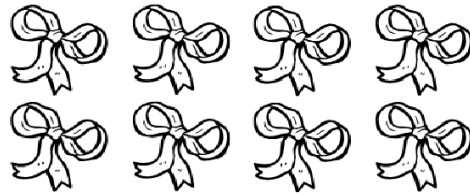
Name: _____

Class: _____

Addition word problems:


Read the word problem. Count and write the answer.

1. I have 4 ribbons.
Ana gave me 4 more.
How many do I have in all?



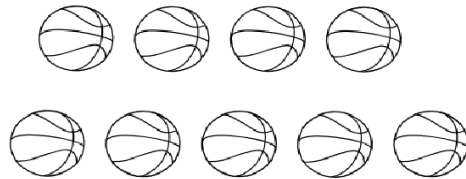
$$\underline{\quad} + \underline{\quad} = \underline{\quad}$$

2. Aaron gave me 4 candies.
Mimi gave me 2 candies.
How many do I have in all?



$$\underline{\quad} + \underline{\quad} = \underline{\quad}$$

3. Ben has 4 balls.
Greg has 5 balls.
How many balls do they have?



$$\underline{\quad} + \underline{\quad} = \underline{\quad}$$