






Name: _____

Class: _____

Pictograph:

The graph shows the library with borrowed books from Monday to Friday. Use the pictograph to answer the questions.

Monday	
Tuesday	
Wednesday	
Thursday	
Friday	

 = 1 book

1. How many books were borrowed on Tuesday? _____
2. Which day has the highest number of books borrowed from the library? _____
3. Which day has the least number of books borrowed from the library? _____
4. What is the total number of books borrowed from the library in a week? _____