


Name: \_\_\_\_\_


Class: \_\_\_\_\_

## Shape identification:

Look at the shapes below. Write the name of each shape in the blank space.



\_\_\_\_\_



\_\_\_\_\_



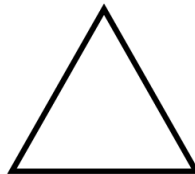
\_\_\_\_\_



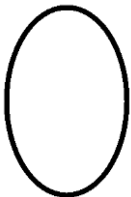
\_\_\_\_\_



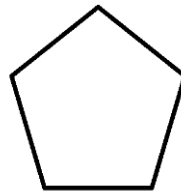
\_\_\_\_\_



\_\_\_\_\_



\_\_\_\_\_



\_\_\_\_\_