

Name: \_\_\_\_\_

Class: \_\_\_\_\_

## Shapes:

Look at the shapes and write the names of the 2D geometric shapes.

STAR

TRIAPEZIUM

SQUARE

HEPTAGON

OVAL

SEMICIRCLE

TRIANGLE






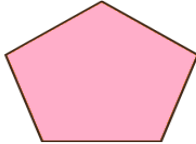

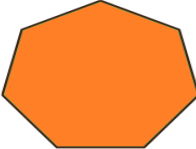



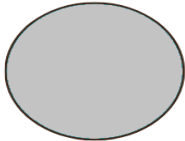
PENTAGON

CIRCLE

RECTANGLE

OCTAGON

HEXAGON

 <input type="text"/>	 <input type="text"/>	 <input type="text"/>
 <input type="text"/>	 <input type="text"/>	 <input type="text"/>
 <input type="text"/>	 <input type="text"/>	 <input type="text"/>
 <input type="text"/>	 <input type="text"/>	 <input type="text"/>