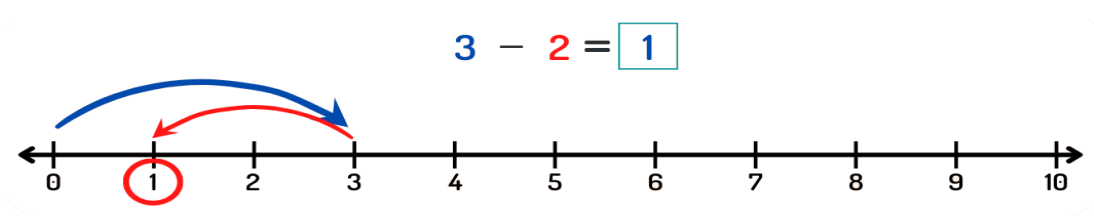


Name: _____

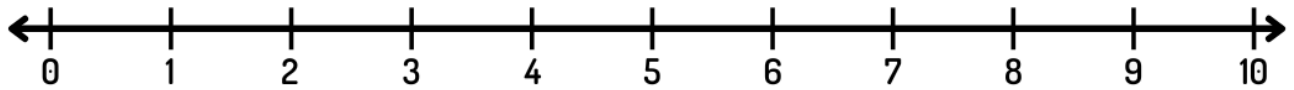
Class: _____

Subtraction with number line:

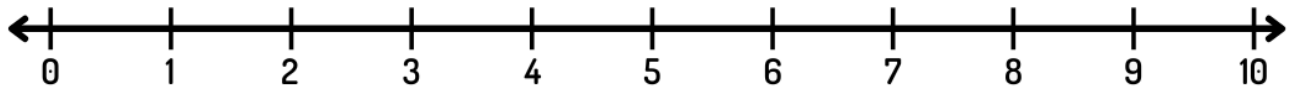
Show the subtraction operation on the number line.
Example is given.



a) $7 - 3 = \underline{\quad}$



b) $8 - 3 = \underline{\quad}$



c) $10 - 6 = \underline{\quad}$

