




















Name: _____

Class: _____

Pictograph:

Four friends have teddies. Count the teddies they have and answer the questions.

Sam							
Tim							
John							
Sarah							

 = 1 teddy

1. Who has got the most teddies? _____
2. Who has 4 teddies? _____
3. How many teddies does Sarah have? _____
4. How many teddies do John and Tim have together?
