





Name: \_\_\_\_\_

Class: \_\_\_\_\_

## Pictograph:

The graph shows how many snowballs each child made. Use the pictograph to answer the questions.

Anna	
Bailey	
Adora	
Sam	
Adeline	

 = 1 snowball

1. How many snowballs did Sam make? \_\_\_\_\_
2. Who made the most snowballs? \_\_\_\_\_
3. How many snowballs did Adora and Anna make? \_\_\_\_\_
4. Who made the least snowballs? \_\_\_\_\_
5. How many snowballs did Bailey and Sam make? \_\_\_\_\_
6. How many snowballs did Adeline make? \_\_\_\_\_