

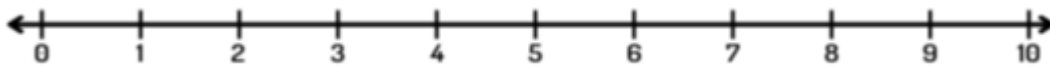
Name: _____

Class: _____

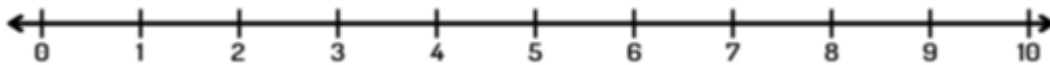
Subtract using number line:

Show the operation on the number line.

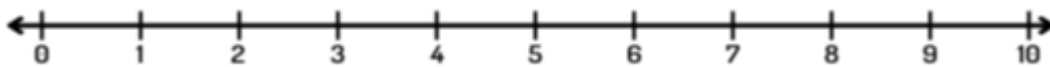
$$2 - 1 = \underline{\quad}$$



$$3 - 2 = \underline{\quad}$$



$$3 - 1 = \underline{\quad}$$



$$4 - 2 = \underline{\quad}$$

