

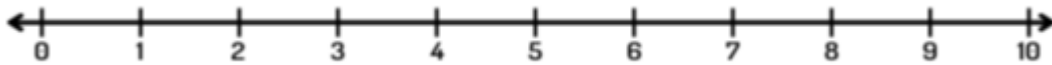
Name: _____

Class: _____

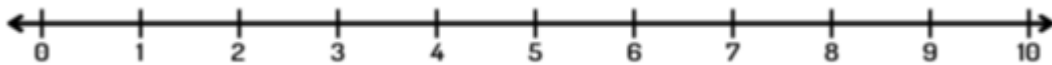
Subtract using number line:

Show the operation on the number line.

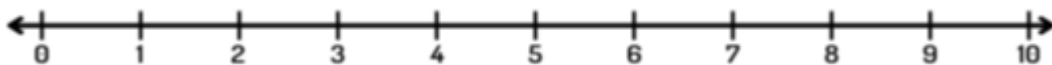
$$6 - 3 = \underline{\quad}$$



$$6 - 4 = \underline{\quad}$$



$$7 - 1 = \underline{\quad}$$



$$6 - 5 = \underline{\quad}$$

