

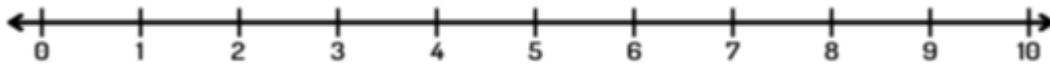
Name: _____

Class: _____

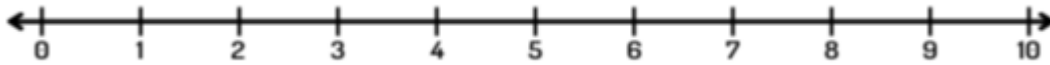
Subtract using number line:

Show the operation on the number line.

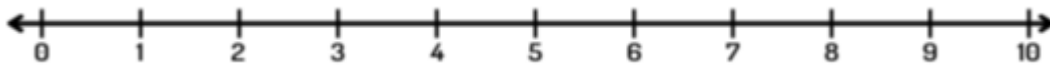
$$7 - 2 = \underline{\quad}$$



$$8 - 3 = \underline{\quad}$$



$$7 - 3 = \underline{\quad}$$



$$7 - 5 = \underline{\quad}$$

